

# S1 Music Homework - National 3 : No. 6

curriculum for excellence



# N3

Name \_\_\_\_\_

Class \_\_\_\_\_

**Learning Outcome** : You will be able to recognise and use different forms of musical notation to calculate values in music.

1. Complete this sentence.

A DOT in music \_\_\_\_\_ of the note that it follows.

2. Write down the value of the following DOTTED NOTES.

 = \_\_\_\_\_

 = \_\_\_\_\_

 = \_\_\_\_\_



3. Solve the following musical sums.




 +  +  = \_\_\_\_\_

 +  +  = \_\_\_\_\_

 +  +  = \_\_\_\_\_

 -  +  = \_\_\_\_\_

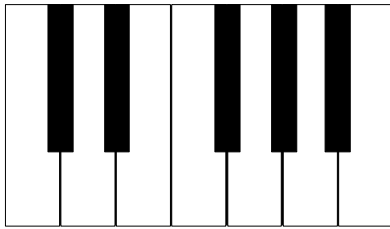
 +  +  = \_\_\_\_\_

 -  +  = \_\_\_\_\_

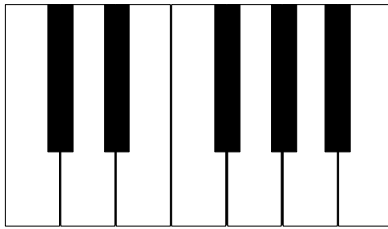
 x  +  = \_\_\_\_\_

 x  +  = \_\_\_\_\_

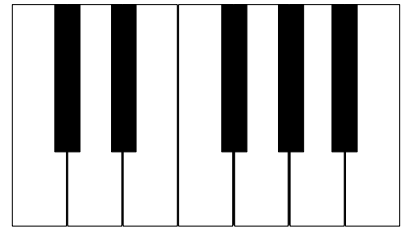
4. Place an 'X' on the following notes on the keyboards below.



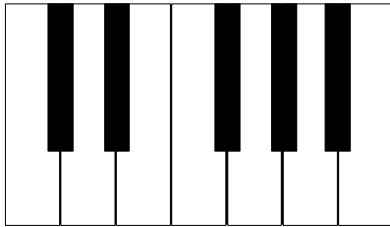
C Sharp



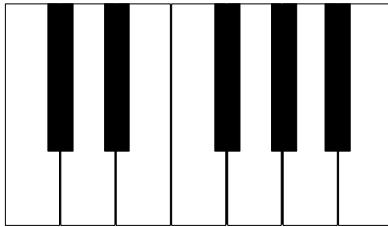
F Natural



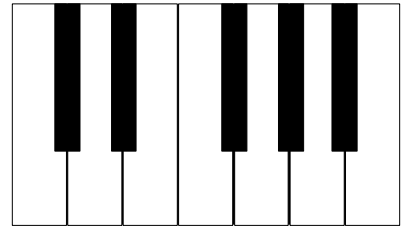
E Flat



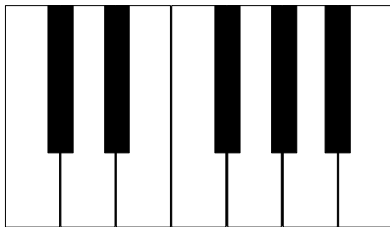
A Natural



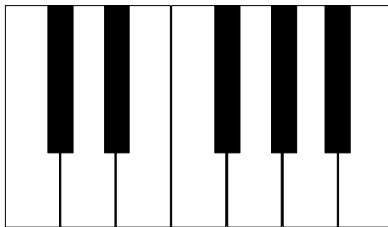
B Flat



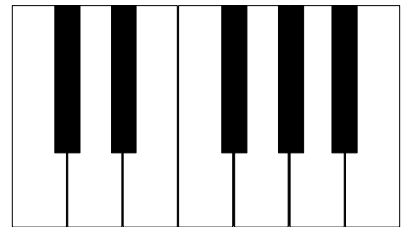
C Natural



F Sharp



D Natural



G Flat

5. Insert **BAR LINES** at the correct place in the following music. Remember to place a **DOUBLE BAR LINE** at the end.



How hard did you find this homework? Rate it below before you hand it to your teacher.

My homework rating

