

# S1 Music Homework - National 3 : No. 5

curriculum for excellence

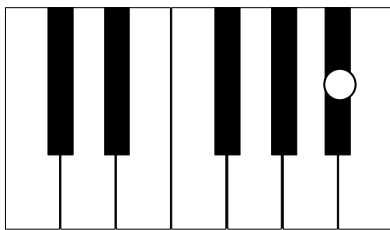


Name \_\_\_\_\_

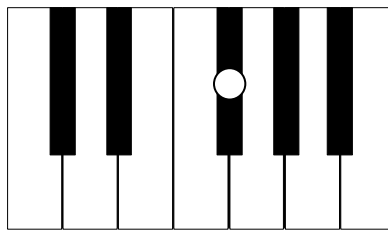
Class \_\_\_\_\_

**Learning Outcome** : You will be able to recognise the distance between notes and name different accidentals.

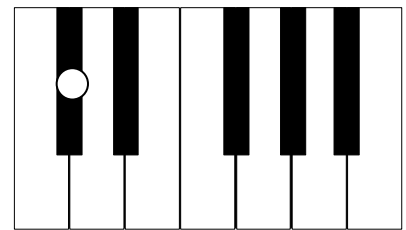
1. Look at the keyboards below and name each of the notes with a white dot.



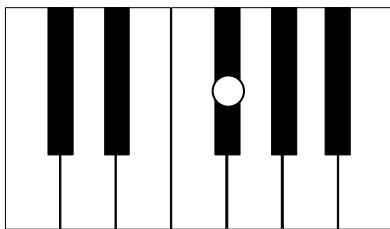
\_\_\_\_\_



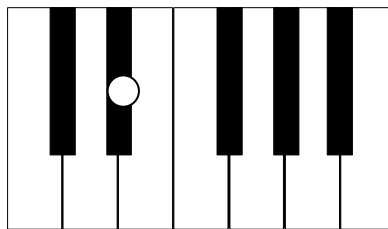
\_\_\_\_\_



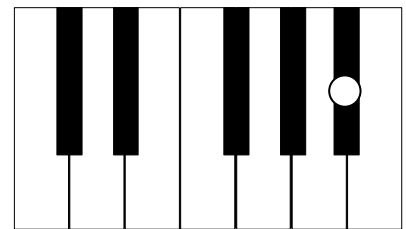
\_\_\_\_\_



\_\_\_\_\_



\_\_\_\_\_



\_\_\_\_\_

2. The **SHORTEST** distance in music is known as a \_\_\_\_\_.

3. Name the following **ACCIDENTALS**.




\_\_\_\_\_



\_\_\_\_\_

4. Name the notes below in full - *for example the first one is 'F Sharp'*.

a.



\_\_\_\_\_

b.



\_\_\_\_\_

c.



\_\_\_\_\_

5. Solve the following musical sums.



$$\text{Quarter note} + \text{Quarter note} + \text{Quarter note} - \text{Quarter note} =$$

$$\text{Quarter note} + \text{Quarter note} + \text{Quarter note} + \text{Quarter note} =$$

How hard did you find this homework? Rate it below before you hand it to your teacher.



My homework rating

