

S1 Music Homework - National 3 : No. 2

curriculum for excellence



N3


Name _____


Class _____

Learning Outcome : *Using numeracy and literacy skills you will be able to identify and understand the names and values of musical notation.*

1. Complete the following :-

 = _____ beats and is known as a _____

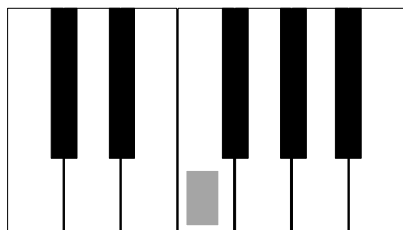
 = _____ beat and is known as a _____

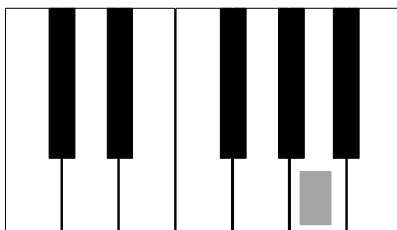
 = _____ beats and is known as a _____

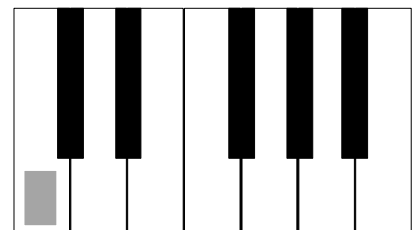
 = _____ beats and is known as a _____




2. Look at the mini keyboards and name the shaded notes on the line below.








3. Look at the following notes and name both the **TYPE OF NOTE** and the **LETTER NAME** of the note.



Note type _____

Letter _____

4. Look at the following notes and name both the **TYPE OF NOTE** and the **LETTER NAME** of the note.



Note type _____

Letter _____

5. Solve these musical sums.



+ = _____

+ + = _____



My homework rating

