

S1 Music Homework - National 3 : No. 1

curriculum for excellence



N3

Name _____

Class _____

Learning Outcome : *You will be able to read, understand and use the lines and spaces on the treble clef.*

1. Complete the following :-




Music is written on a _____ which consists of _____ lines and _____ spaces.

2. The sign found at the beginning of a stave is called a _____

3. The rhyme used to remember the letter names of the lines is _____


4. The letter names on the spaces spell the word _____

5. On the stave below, draw four treble clef signs.







6. Name the following notes on the staff below.




7. Name the following notes on the staff below.



8. Work out the following words and write them on the lines below.







My homework rating

